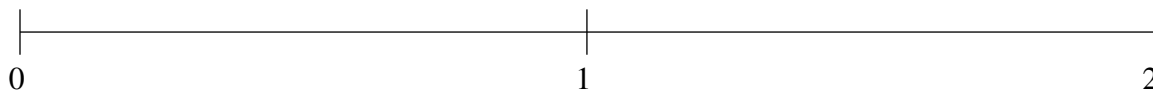


## Classification de Fractions (J)

À l'aide des droites numériques, classifiez chaque série de fractions ci-dessous en ordre croissant.

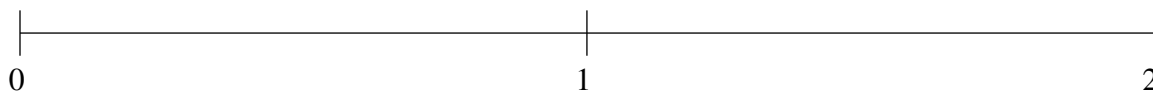
$$\frac{7}{10}, 1\frac{9}{10}, \frac{1}{4}, 1\frac{1}{4}, 1\frac{3}{5}$$



$$1\frac{1}{5}, 1\frac{4}{5}, \frac{3}{5}, \frac{1}{4}, 1\frac{1}{2}$$



$$\frac{4}{5}, \frac{1}{4}, 1\frac{1}{5}, 1\frac{9}{10}, 1\frac{1}{2}$$



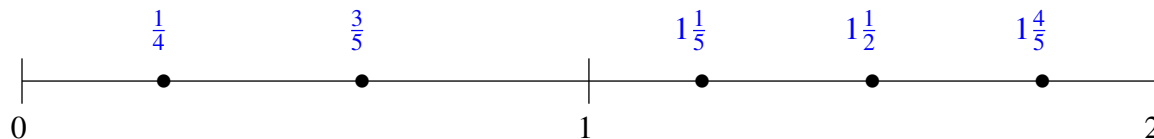
## Classification de Fractions (J) Solutions

À l'aide des droites numériques, classifiez chaque série de fractions ci-dessous en ordre croissant.

$$\frac{7}{10}, 1\frac{9}{10}, \frac{1}{4}, 1\frac{1}{4}, 1\frac{3}{5}$$



$$1\frac{1}{5}, 1\frac{4}{5}, \frac{3}{5}, \frac{1}{4}, 1\frac{1}{2}$$



$$\frac{4}{5}, \frac{1}{4}, 1\frac{1}{5}, 1\frac{9}{10}, 1\frac{1}{2}$$

